

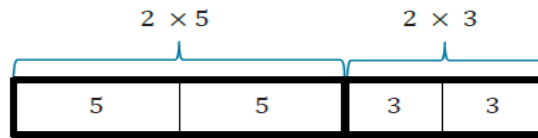


## Lesson 11: Factoring Expressions *Distributive Property*

### Student Outcomes

- Students model and write equivalent expressions using the distributive property. They move from an expanded form to a factored form of an expression.

a. Use the model to answer the following questions.



How many fives are in the model?

*2*

$$2 \times 5 + 2 \times 3$$

How many threes are in the model?

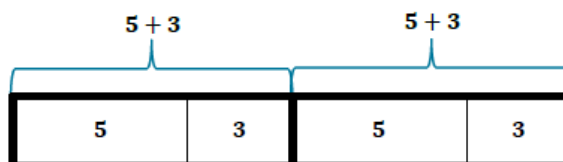
*2*

What does the expression represent in words?

What expression could we write to represent the model?

Feb 18-6:59 AM

b. Use the new model and the previous model to answer the next set of questions.



How many fives are in the model?

How many threes are in the model?

What does the expression represent in words?

What expression could we write to represent the model?

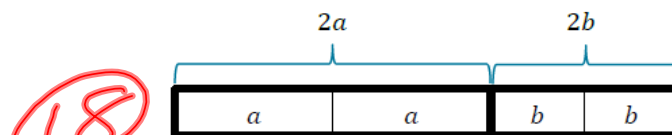
Feb 18-7:04 AM

- c. Is the model in part (a) equivalent to the model in part (b)?
  
- d. What relationship do we see happening on either side of the equal sign?
  
- e. In 5<sup>th</sup> grade and in Module 2 of this year, you have used similar reasoning to solve problems. What is the name of the property that is used to say that  $2(5 + 3)$  is the same as  $2 \times 5 + 2 \times 3$ ?

Feb 18-7:05 AM

**Example 2**

Now, we will take a look at an example with variables. Discuss the questions with your partner.



What does the model represent in words?

$12$                        $6$   
 $2a + 2b$   
 $2 \cdot a + 2 \cdot b$   
 $a + a + b + b$

What does  $2a$  mean?

How many  $a$ 's are in the model?

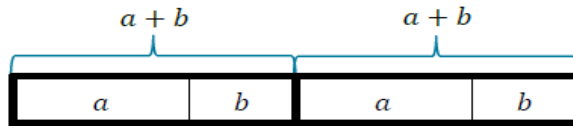
$2$

How many  $b$ 's are in the model?

$2$

Feb 18-7:05 AM

What expression could we write to represent the model?



How many  $a$ 's are in the expression?

2

$$(a+b) + (a+b)$$

How many  $b$ 's are in the expression?

2

$$2(a+b)$$

- Factored Form

What expression could we write the represent the model?

Are the two expressions equivalent?

Feb 18-7:06 AM

**Example 3**

Greatest Common Factor

Use GCF and the distributive property to write equivalent expressions.

1.  $3f + 3g =$   $3(f+g)$  - Factored Form  
~~What is the question asking us to do?~~  $3f + 3g$  - Dist. Property

How would Problem 1 look if we expanded each term?

~~$3 \cdot f + 3 \cdot g = 3(f+g)$~~

What is the GCF in Problem 1?

3

How can we use the GCF to rewrite this?

Feb 18-7:07 AM

2.  $6x + 9y = \underline{3(2x + 3y)}$   $\rightarrow$   $6x + 9y$

What is the question asking us to do?

How would Problem 2 look if we expanded each term?

~~$3 \cdot 2 \cdot x + 3 \cdot 3 \cdot y = 3(2x + 3y)$~~

What is the GCF in Problem 2?

How can we use the GCF to rewrite this?

- Factored Form

$6x + 9y$

Feb 18-7:08 AM

3.  $3c + 11c = \underline{c(3+11)}$

Is there a greatest common factor in Problem 3?

Rewrite the expression using the distributive property.

4.  $24b + 8 = \underline{\hspace{2cm}}$

Explain how you used GCF and the distributive property to rewrite the expression in Problem 4.

Why is there a 1 in the parentheses?

How is this related to the first two examples?

Feb 18-7:09 AM

## Exercises

1. Apply the distributive property to write equivalent expressions.

a.  $7x + 7y$   $7(x + y)$

b.  $15g + 20h$   $5(3g + 4h)$

~~$5 \cdot 3 \cdot g + 5 \cdot 4 \cdot h = 5(3g + 4h)$~~   
 c.  $18m + 42n$   $6(3m + 7n)$   $15g + 20h$

d.  $30a + 39b$

e.  $11f + 15f$

f.  $18h + 13h$

g.  $55m + 11$

h.  $7 + 56y$

Feb 18-7:09 AM

2. Evaluate each of the expressions below.

a.  $6x + 21y$  and  $3(2x + 7y)$   $x = 3$  and  $y = 4$

b.  $5g + 7g$  and  $g(5 + 7)$   $g = 6$



Feb 18-7:10 AM

~~c.~~  $14x + 2$  and  $2(7x + 1)$        $x = 10$

~~d.~~ Explain any patterns that you notice in the results to parts (a)–(c).

~~e.~~ What would happen if other values were given for the variables?



Feb 18-7:10 AM

### Closing

How can you use your knowledge of GCF and the distributive property to write equivalent expressions?

Find the missing value that makes the two expressions equivalent.

$4x + 12y$       \_\_\_\_  $(x + 3y)$

$35x + 50y$       \_\_\_\_  $(7x + 10y)$

$18x + 9y$       \_\_\_\_  $(2x + y)$

$32x + 8y$       \_\_\_\_  $(4x + y)$

$100x + 700y$       \_\_\_\_  $(x + 7y)$

Explain how you determine the missing number.



Feb 18-7:11 AM

## Lesson Summary

**An Expression in Factored Form:** An expression that is a product of two or more expressions is said to be in *factored form*.

## Problem Set

1. Use models to prove that  $3(a + b)$  is equivalent to  $3a + 3b$ .
2. Use greatest common factor and the distributive property to write equivalent expressions for the following expressions.
  - a.  $4d + 12e$
  - b.  $18x + 30y$
  - c.  $21a + 28y$
  - d.  $24f + 56g$

Feb 18-7:12 AM

## Exit Ticket

Use the distributive property to expand the following expressions.

1.  $2(b + c)$

2.  $5(7h + 3m)$

3.  $e(f + g)$

Feb 19-5:29 AM