



Lesson 16: Symmetry in the Coordinate Plane

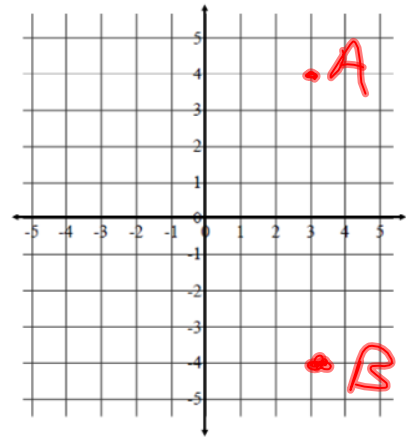
$(3, 4)$ $(3, -4)$
 A B

Student Outcomes

- Students understand that two numbers are said to differ only by signs if they are opposite of each other.
- Students recognize that when two ordered pairs differ only by sign of one or both of the coordinates, then the locations of the points are related by reflections across one or both axes.

Extending Opposite Numbers to the Coordinates of Points on the Coordinate Plane

Locate and label your points on the coordinate plane to the right. For each given pair of points in the table below, record your observations and conjectures in the appropriate cell. Pay attention to the absolute values of the coordinates and where the points lie in reference to each axis.



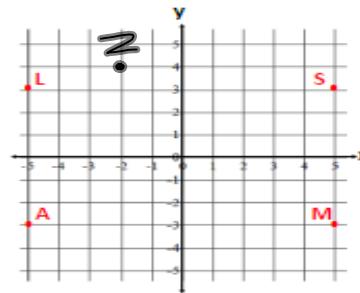
Jan 23-5:54 AM

	$(3, 4)$ and $(-3, 4)$	$(3, 4)$ and $(3, -4)$	$(3, 4)$ and $(-3, -4)$
Similarities of Coordinates	same y value		
Differences of Coordinates	opposite x coordinates		
Similarities in Location	3 units away from y axis		
Differences in Location	One is 4 above x axis. 1 is 4 below x axis		
Relationship between Coordinates and Location on the Plane	same x coordinate same absolute value		

Jan 23-5:58 AM

In each column, write the coordinates of the points that are related to the given point by the criteria listed in the first column of the table. Point $S(5,3)$ has been reflected over the x - and y -axes for you as a guide and its images are shown on the coordinate plane. Use the coordinate grid to help you locate each point and its corresponding coordinates.

Given Point:	$S(5,3)$	Z $(-2,4)$	X $(3,-2)$	W $(-1,-5)$
Reflected across the x -axis.	$M(5,-3)$			
Reflected across the y -axis.				
Reflected first across the x -axis then across the y -axis.				
Reflected first across the y -axis then across the x -axis.				



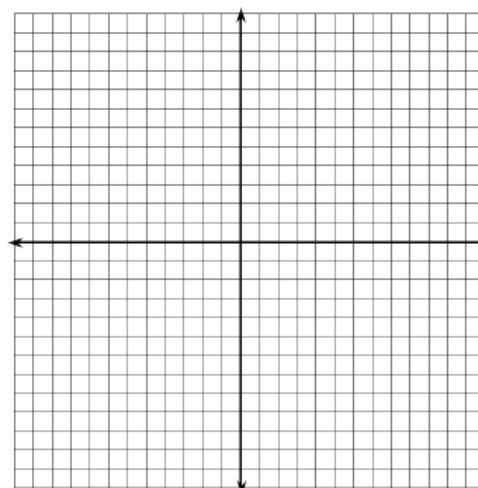
- When the coordinates of two points are (x,y) and $(-x,y)$, what line of symmetry do the points share? Explain.
- When the coordinates of two points are (x,y) and $(x,-y)$, what line of symmetry do the points share? Explain.

Jan 23-6:00 AM

Problem Set

1. Locate a point in Quadrant IV of the coordinate plane. Label the point A and write its ordered pair next to it.

- Reflect point A over an axis so that its image is in Quadrant III. Label the image B and write its ordered pair next to it. Which axis did you reflect over? What is the only difference in the ordered pairs of points A and B ?
- Reflect point B over an axis so that its image is in Quadrant II. Label the image C and write its ordered pair next to it. Which axis did you reflect over? What is the only difference in the ordered pairs of points B and C ? How does the ordered pair of point C relate to the ordered pair of point A ?
- Reflect point C so that its image is in Quadrant I. Label the image D and write its ordered pair next to it. Which axis did you reflect over? How does the ordered pair for point D compare to the ordered pair for point C ? How does the ordered pair for point D compare to points A and B ?



2. Bobbie listened to her teacher's directions and navigated from the point $(-1,0)$ to $(5,-3)$. She knows that she has the correct answer but, she forgot part of the teacher's directions. Her teacher's directions included the following: "Move 7 units down, reflect about the ?-axis, move up 4 units, then move right 4 units." Help Bobbie determine the missing axis in the directions, and explain your answer.

Jan 23-6:00 AM



Lesson 16: Symmetry in the Coordinate Plane

Student Outcomes

- Students understand that two numbers are said to differ only by signs if they are opposite of each other.
- Students recognize that when two ordered pairs differ only by sign of one or both of the coordinates, then the locations of the points are related by reflections across one or both axes.

Jan 23-5:56 AM